




## Topic 4 - Fractions

1

Rana, Penny and Joshua share a pizza.



Rana eats  $\frac{2}{10}$  of the pizza.

Penny eats  $\frac{4}{10}$  of the pizza.

Joshua eats  $\frac{2}{5}$  of the pizza.

Which of these statements is/are correct?

- 1 They eat the whole pizza.
- 2 Joshua eats the least pizza.
- 3 Penny eats twice as much pizza as Joshua.

- A** statement 1 only
- B** statement 2 only
- C** statements 1 and 2 only
- D** statements 1 and 3 only
- E** statements 2 and 3 only



2

Which of these statements is/are correct?

**X**  $\frac{3}{4} + \frac{3}{4}$  is more than  $1\frac{1}{4}$

**Y**  $1 - \frac{3}{8}$  is less than  $\frac{3}{8}$

**Z**  $\frac{1}{6}$  is more than  $\frac{1}{10}$

- A** statement Y only
- B** statement Z only
- C** statements X and Y only
- D** statements X and Z only
- E** statements Y and Z only



3

Finn, Gabriella and Hassan have some stickers.

Finn has 8 times as many stickers as Gabriella.

Hassan has  $\frac{1}{2}$  as many stickers as Gabriella.

Finn has  times as many stickers as Hassan.

What is the missing number in the sentence above?

**A**  $\frac{1}{16}$

**B**  $\frac{1}{4}$

**C** 4

**D** 12

**E** 16



4

Which of these numbers is closest to  $\frac{7}{10}$ ?

**A** 0.072

**B** 0.705

**C** 0.68

**D** 0.069

**E** 0.73



5

Jack divides a white wall into equal sections.

He paints some sections purple, as shown.



Jack then paints  $\frac{2}{5}$  of the whole wall yellow.

Finally, he paints the rest of the wall green.

How many sections does he paint green?

- A 1
- B 2
- C 3
- D 4
- E 5



6



Andy, Bella and Carlo shared a chocolate bar.

Andy ate  $\frac{1}{5}$  of the bar, Bella ate  $\frac{2}{5}$  of the bar and Carlo ate the rest.

Which of the following statements are correct?

- 1 Carlo ate less than half of the chocolate bar.
  - 2 Andy ate more than one quarter of the chocolate bar.
  - 3 Andy and Bella ate less than three quarters of the chocolate bar altogether.
- A** statement 1 only
- B** statement 2 only
- C** statement 3 only
- D** statements 1 and 2 only
- E** statements 1 and 3 only



7

Quoc bought 4 pizzas to share with Amina, Fred and Sally.

Amina ate  $\frac{4}{5}$  of a pizza.

Fred ate  $1\frac{1}{5}$  pizzas.

Sally ate  $\frac{3}{5}$  of a pizza.

Quoc ate **all** of the pizza that was left.

How much **more** pizza did Quoc eat than Amina?

**A**  $\frac{2}{5}$

**B**  $\frac{3}{5}$

**C**  $\frac{4}{5}$

**D**  $1\frac{4}{5}$

**E**  $2\frac{1}{5}$



# Personalised English & Math Tutoring



Redeem Free Assessment







## Answer Key

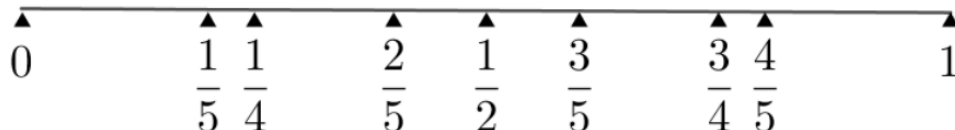
1	A
2	D
3	E
4	B
5	<p>The wall has ten equal sections. Jack paints <math>\frac{2}{5}</math> of the whole wall yellow; this is the same as <math>\frac{4}{10}</math> so Jack paints 4 sections yellow. The diagram below shows <math>\frac{2}{5}</math> and <math>\frac{4}{10}</math> are equivalent:</p>  <p>Jack paints 5 sections purple and 4 sections yellow. This leaves just one section to be painted green. So Jack paints 1 section green, and the correct answer is <b>A 1</b>.</p> 



6

Andy ate  $\frac{1}{5}$  of the bar and Bella ate  $\frac{2}{5}$  of the bar, so Carlo must have also eaten  $\frac{2}{5}$  of the bar.

This number line shows the position of the relevant fractions:



Checking each statement in turn:

**1** Carlo ate less than half of the chocolate bar.

$\frac{2}{5}$  is less than one half, so statement 1 is correct.

**2** Andy ate more than one quarter of the chocolate bar.

$\frac{1}{5}$  is less than one quarter, so statement 2 is not correct.

**3** Andy and Bella ate less than three quarters of the chocolate bar altogether.

Together, Andy and Bella ate  $\frac{3}{5}$  of the chocolate bar, so statement 3 is correct.

So the correct answer is **E statements 1 and 3 only** are correct.

7

Altogether, Amina, Fred and Sally ate  $\frac{4}{5} + 1\frac{1}{5} + \frac{3}{5} = 2\frac{3}{5}$  pizzas. This leaves  $1\frac{2}{5}$  for Quoc to eat, which is equivalent to  $\frac{7}{5}$ . So Quoc eats  $\frac{7}{5} - \frac{4}{5} = \frac{3}{5}$  more pizza than Amina, and the correct answer is **B**  $\frac{3}{5}$ .

Alternatively, we could work it out by thinking about the number of slices. Imagine cutting each of the four pizzas into 5 slices, so there would be  $4 \times 5 = 20$  slices altogether, with each slice being  $\frac{1}{5}$  of a pizza.

Amina ate  $\frac{4}{5}$  of a pizza, which is 4 slices.

Fred ate  $1\frac{1}{5}$  of a pizza, which is  $5 + 1 = 6$  slices.

Sally ate  $\frac{3}{5}$  of a pizza which is 3 slices.



Altogether they have eaten 13 out of 20 slices, leaving 7 slices for Quoc. This is 3 slices more than Amina ate, which is  $\frac{3}{5}$  of a pizza.

We could also show this information using a diagram:

