
















## Worksheet 4: Counting and Adding Numbers

Question 1: Count and color the correct number.











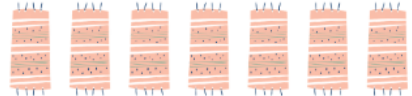

	<p>1</p> <p>2</p> <p>3</p>		<p>6</p> <p>7</p> <p>8</p>
	<p>3</p> <p>4</p> <p>5</p>		<p>5</p> <p>6</p> <p>8</p>
	<p>4</p> <p>5</p> <p>6</p>		<p>8</p> <p>9</p> <p>10</p>



Question 2: Count and write the numbers.





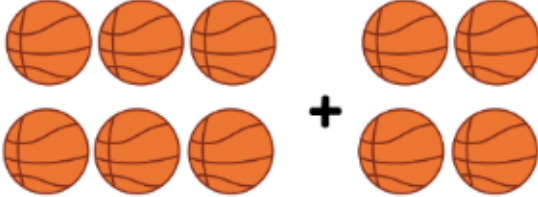
 <input type="text"/>	 <input type="text"/>
 <input type="text"/>	 <input type="text"/>
 <input type="text"/>	 <input type="text"/>
 <input type="text"/>	 <input type="text"/>
 <input type="text"/>	 <input type="text"/>
 <input type="text"/>	 <input type="text"/>

 <input type="text"/>	 <input type="text"/>
 <input type="text"/>	 <input type="text"/>
 <input type="text"/>	 <input type="text"/>
 <input type="text"/>	 <input type="text"/>
 <input type="text"/>	 <input type="text"/>
 <input type="text"/>	 <input type="text"/>



Question 3: Count, write the number of each object and add them.

	$\underline{\quad} + \underline{\quad} = \underline{\quad}$
	$\underline{\quad} + \underline{\quad} = \underline{\quad}$
	$\underline{\quad} + \underline{\quad} = \underline{\quad}$
	$\underline{\quad} + \underline{\quad} = \underline{\quad}$
	$\underline{\quad} + \underline{\quad} = \underline{\quad}$



# Personalised English & Math Tutoring

Redeem Free Assessment



















# Answer Key

Question 1:













	<p>1</p> <p>2</p> <p>3</p>		<p>6</p> <p>7</p> <p>8</p>
	<p>3</p> <p>4</p> <p>5</p>		<p>5</p> <p>6</p> <p>8</p>
	<p>4</p> <p>5</p> <p>6</p>		<p>8</p> <p>9</p> <p>10</p>



Question 2:

 6	 8
 5	 7
 3	 4
 4	 3
 7	 6
 8	 5

 5	 9
 10	 5
 4	 6
 6	 4
 8	 7
 7	 10



Question 3:



$$3 + 1 = 4$$



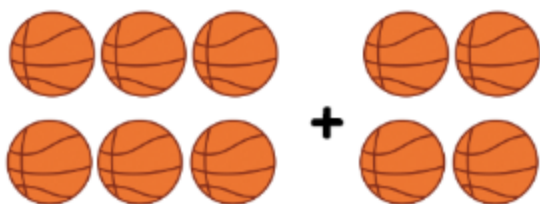
$$6 + 4 = 10$$



$$2 + 4 = 6$$



$$2 + 2 = 4$$



$$6 + 4 = 10$$